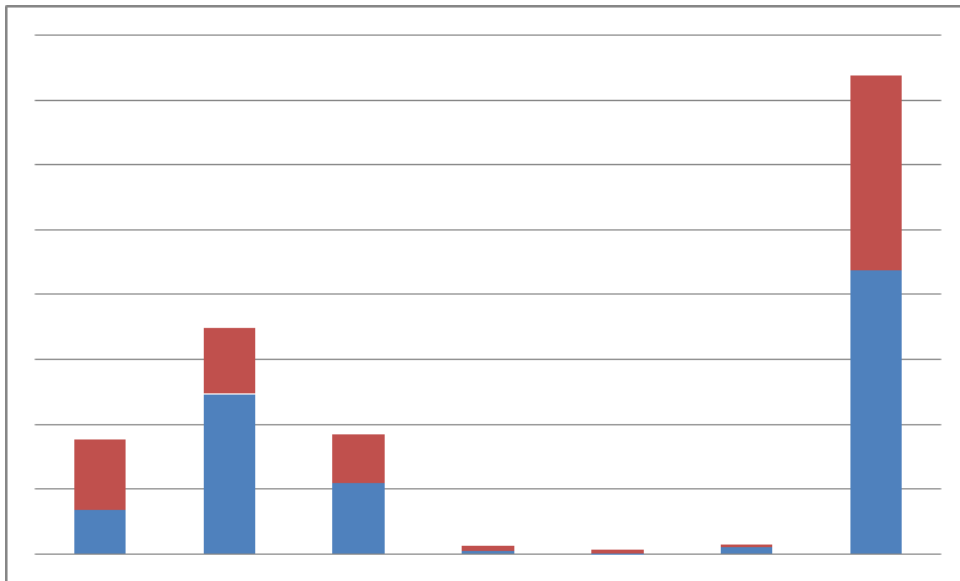


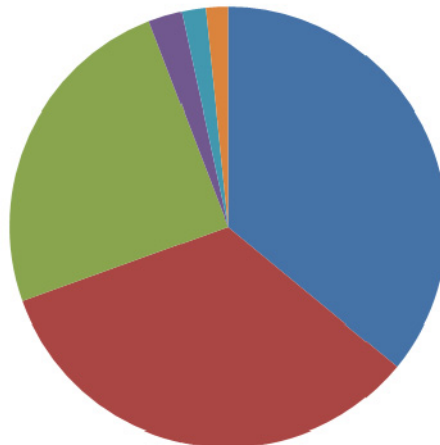
What information does this Graph give you?



Absolutely nothing is the answer. Just having a title would be an improvement.

So how about this one?

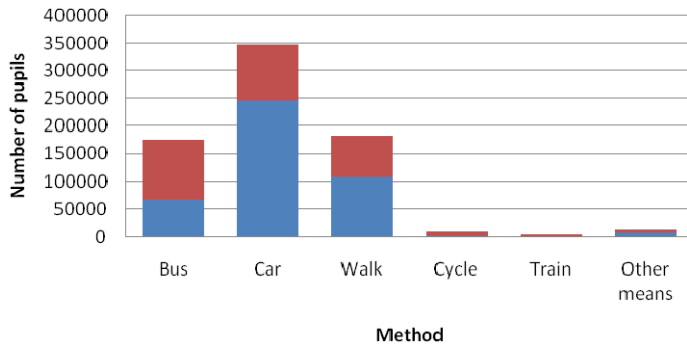
How 13 to 18 year olds Travel to School



At least we know what the chart is meant to be about, but what do the individual slices mean?

What we need are **clear labels** to help us. Let's try again:

Methods of Travelling to school



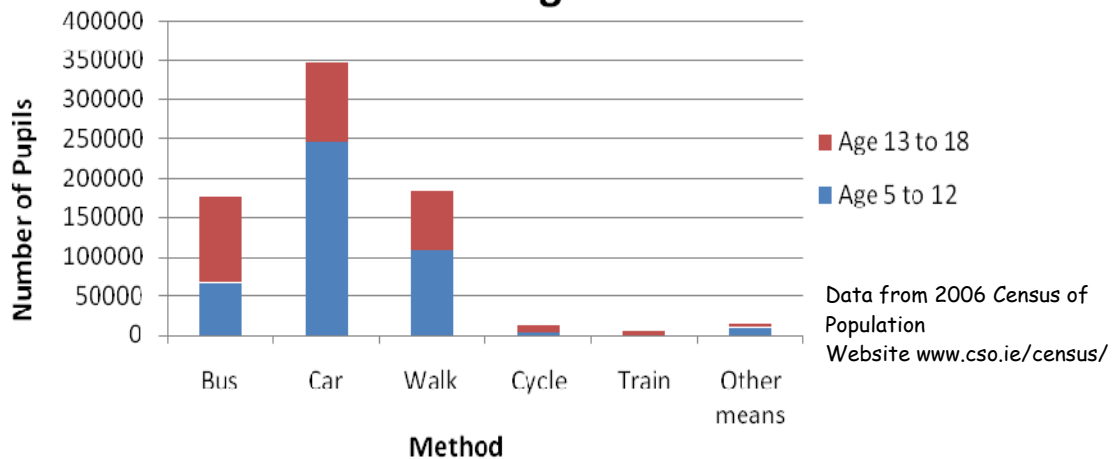
This looks much better but there are still a couple of things missing.

Can you spot them?

That's right - we need to know what the two colours in each bar mean and also where the data came from.

Lets have a final go:

Methods of Travelling to School



At last, a barchart that gives us some useful information.

Always remember:

TITLE LABELS KEY

Now draw a **useful** bar chart of either the data given below or some data you have collected yourself.

Travel Method	Walk	Bus	Car	Cycle	Train..	Other
Number of People	16	8	12	4	0	1